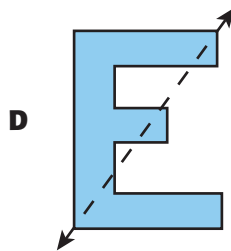
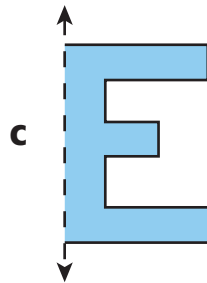
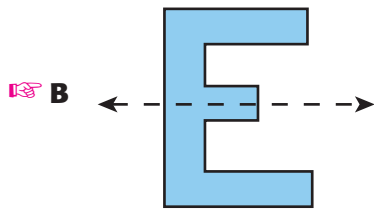
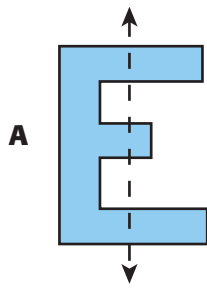


36

3180554

Adam wants to draw a line of symmetry through the capital letter E. Which of the following shows the correct line of symmetry?



55

3180569

The Martinez sisters have a round water bowl for their dogs. It has a circumference of about 75 inches.

In your answer document, draw a picture of the top of the water bowl. Label the circumference and the radius with their measurements.