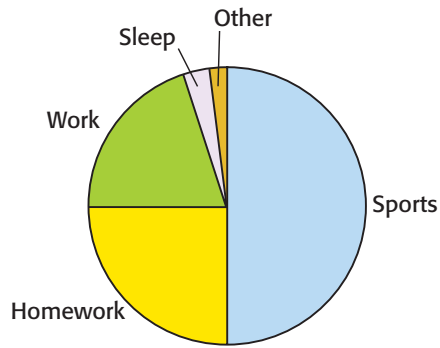


Patti surveyed students at her school to determine their favorite after-school activities. The data she collected are shown in the table below.

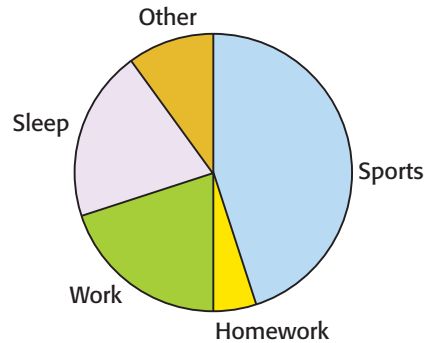
**Favorite Activity**

Activity	Percent of Students
Sports	50%
Homework	25%
Work	20%
Sleep	3%
Other	2%

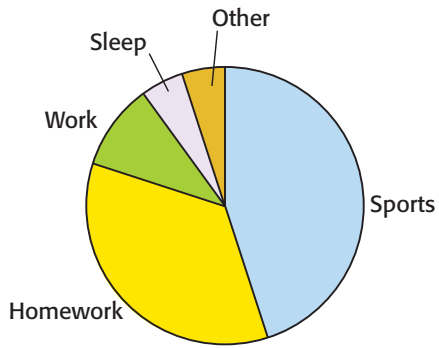
Which circle graph *best* represents this data?



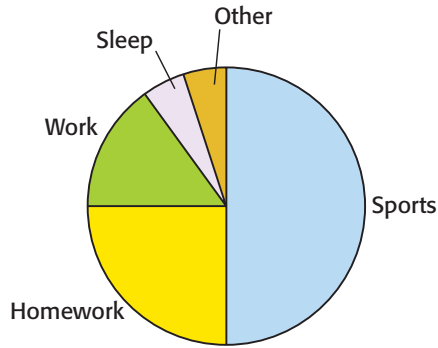
**A**



**C**



**B**



**D**

**70**

3169168

Joan has a bag of pencil erasers that are identical except for color. The bag has 6 pink, 4 white, 5 green, and 5 yellow erasers. If Joan reaches into the bag and pulls out one eraser without looking, what is the probability of pulling out a pink eraser?

- A 20%
- B 30%
- C 60%
- D 70%